









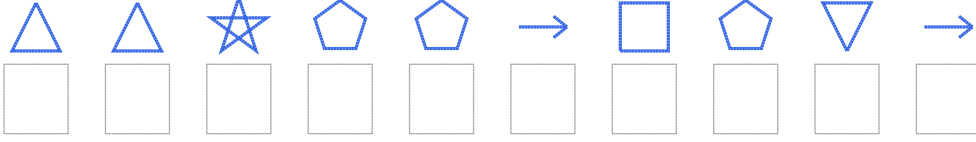


Şekil Sayı Eşleştirme

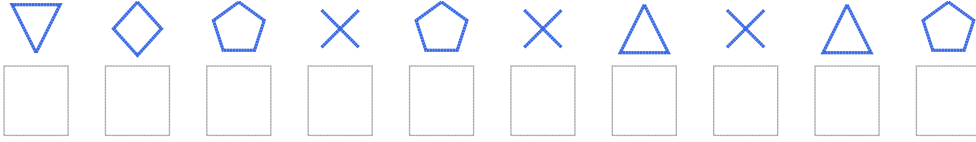
									
= 3	= 8	= 4	= 2	= 7	= 5	= 9	= 1	= 0	= 6

Aşağıdaki uzun şifreleri hatasız çözerek altlarına yazın:

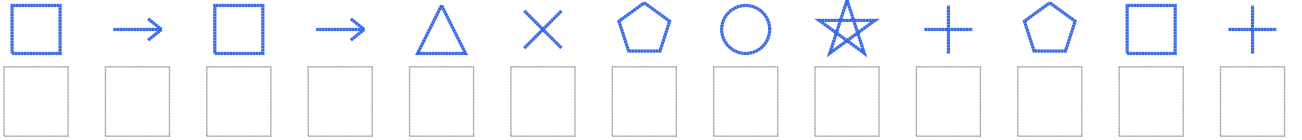
1. Şifre



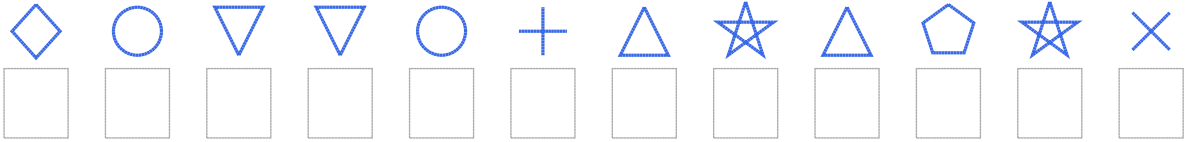
2. Şifre



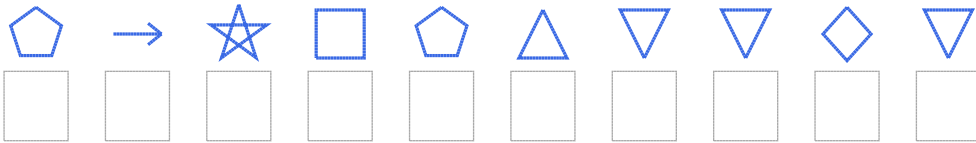
3. Şifre



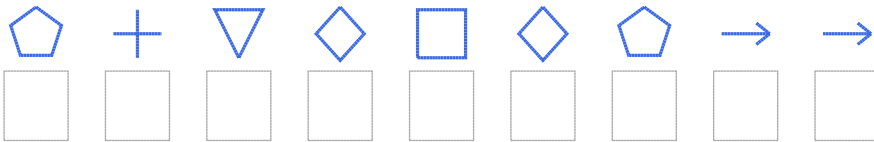
4. Şifre



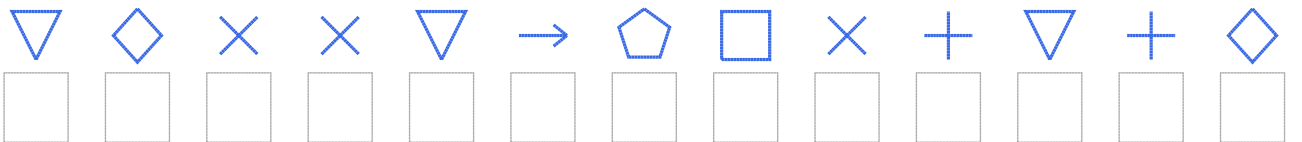
5. Şifre



6. Şifre



7. Şifre



□ BONUS: 2. ve 6. şifrenin üçüncü rakamının toplamı kaçtır?

Cevap Anahtarı

1. Şifre: 9931187148
2. Şifre: 4610109091
3. Şifre: 7878901532172
4. Şifre: 654452939130
5. Şifre: 1837194464
6. Şifre: 124676188
7. Şifre: 4600481702426

□ Bonus Soru Cevabı: 5